

Name _____ Period _____

Chapter 25: The History of Life on Earth

Overview

1. In the last chapter, you were asked about *macroevolution*. To begin this chapter, give some examples of *macroevolution*. Include at least one novel example not in your text.

Concept 25.1 Conditions on early Earth made the origin of life possible

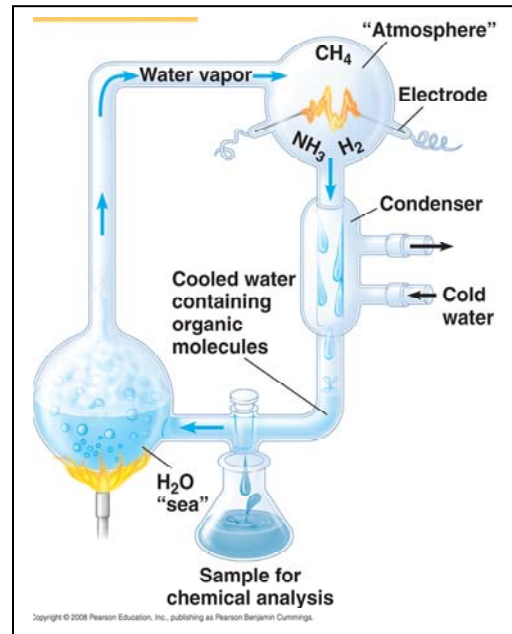
2. How old is the planet? _____ How old is the earliest evidence of life on Earth?

3. The current theory of the origin of life suggests a sequence of four main stages. Summarize them here.

1.	
2.	
3.	
4.	

4. In your chart above, the first stage is the synthesis of organic molecules. Consider the early planet, probably thick with water vapor and stinky with methane, ammonia, and hydrogen sulfide. What gas was missing from this early mix? Why?
5. *A. I. Oparin and J. B. S. Haldane* hypothesized that the early atmosphere was a *reducing environment*. What did they suggest was the source of energy for the early organic synthesis?

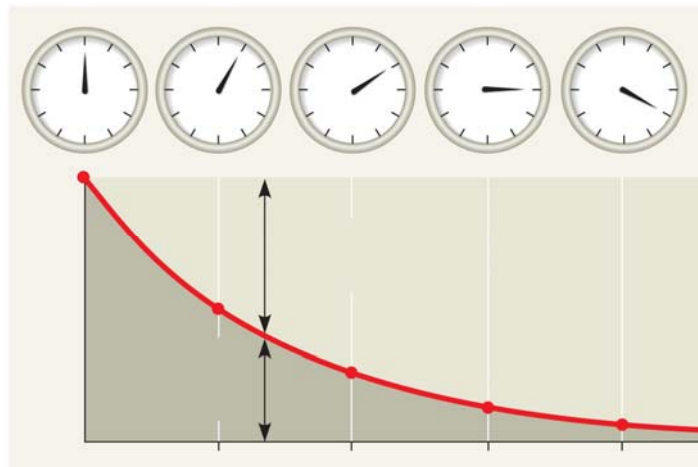
6. In 1953 at the University of Chicago, *Stanly Miller* and *Harold Urey* tested the *Oparin-Haldane hypothesis* with this apparatus. (It is shown in Chapter 4, Figure 4.2, so you have seen it before.) Explain the elements of this experiment, using arrows to indicate what occurs in various parts of the apparatus.



7. What was collected in the sample for chemical analysis? What was concluded from the results of this experiment?
8. What are *protobionts*? What properties of life do they demonstrate?
9. What did *Thomas Cech* propose was the first genetic material, DNA or RNA? _____
10. What are *ribozymes*?
11. Explain the evidence for an early "RNA world."

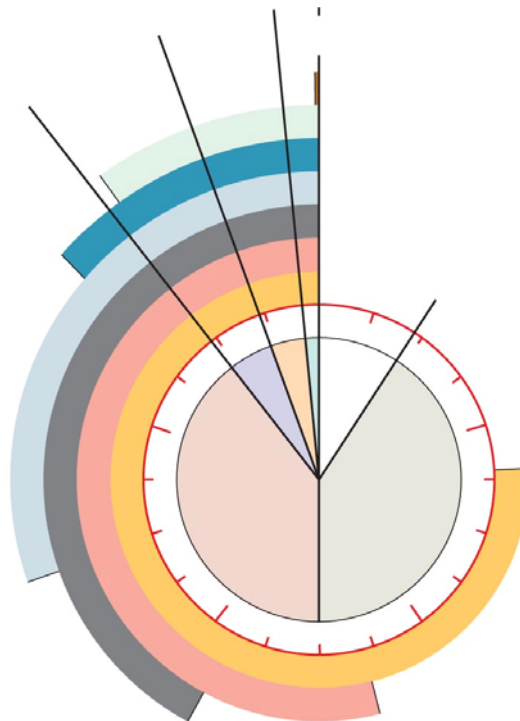
Concept 25.2 *The fossil record documents the history of life*

12. In what type of rock are fossils found? _____
13. What do we *not* know from analyzing rock strata?
14. Rocks and fossils are dated in several ways. *Relative dating* uses the order of rock strata to determine the relative age of fossils. *Radiometric dating* uses the decay of radioactive isotopes to determine the age of the rocks or fossils. It is based on the rate of decay, or **half-life** of the isotope. To determine the *absolute* age of a fossil, *radiometric dating* is used. Use this figure to explain the concept of radiometric dating. Label key elements.



15. What is the age range for which carbon-14 dating may be used?
16. To date fossils outside the range of carbon-14 dating, researchers use indirect methods of establishing absolute fossil age. Explain two of these methods, *potassium-40* and *magnetism shifts*.

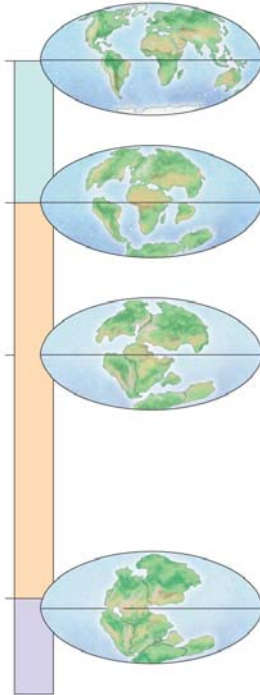
22. Summarize three lines of evidence that support the model of endosymbiosis.
23. Use the clock model to note the following events in the life of the planet: *origin of the Earth*, *appearance of prokaryotes*, *evolution of atmospheric oxygen*, *occurrence of eukaryotic cells*, *multicellularity*, and *life moves onto land*. For each event, also label the number of years ago it occurred.



Concept 25.4 The rise and fall of dominant groups reflect continental drift, mass extinctions, and adaptive radiations

24. If you have not studied geology, you will find this concept introduces a fascinating look at the changes in our planet as explained by *continental drift*. Define *continental drift*. How can continents move?

25. On the figure below, label Pangaea, Gondwana, and Laurasia.



26. See if you can answer each of these short questions:
- What is the *San Andreas* Fault?
 - What caused the uplift of the Himalayas?
 - How can a fossil freshwater reptile be found in both Brazil and west Africa, areas separated today by a wide expanse of ocean?
 - Why are no *eutherians* (placental) mammals indigenous to Australia?
27. A *mass extinction* is the loss of large numbers of species in a short period, caused by global environmental changes. What caused the *Permian mass extinction* 250 million years ago (mya)? Summarize the species that were lost.

28. A second important mass extinction is the *Cretaceous mass extinction* that happened about 65 mya. Everyone's favorite group, the dinosaurs, was lost, along with more than half of all marine species. What caused it?
29. What are *adaptive radiations*?
30. Why did a large-scale adaptive radiation occur after each mass extinction?

Concept 25.5 Major changes in body form can result from changes in the sequences and regulation of developmental genes

31. What two areas of biology are merged in the field of study commonly called evo-devo?
32. What is an evolutionary change in the rate or timing of developmental events?
33. *Homeotic genes* are master regulatory genes that determine the location and organization of body parts. Mutations in a *homeotic gene* can have a profound effect on morphology. Homeotic gene mutations can contribute to the potential for evolutionary change. The *Hox* genes are one class of homeotic genes. What do they control?

Concept 25.6 Evolution is not goal oriented

34. When a structure that has evolved in one context becomes co-opted for another purpose, this event is called _____.

Testing Your Knowledge: Self-Quiz Answers

Now you should be ready to test your knowledge. Place your answers here:

1. _____ 2. _____ 3. _____ 4. _____ 5. _____ 6. _____ 7. _____